

Name _____ Period _____

SCORE:

____ / ____

____ %

9.6 HW

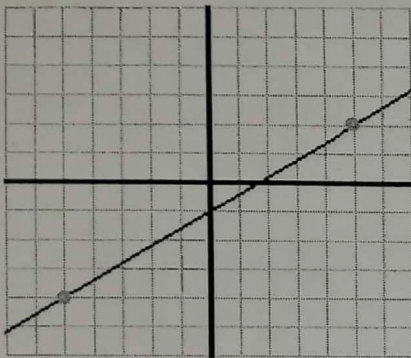
Write the equation of the line with the given slope and y-intercept.

1. Slope is -3 and a y-intercept of 7

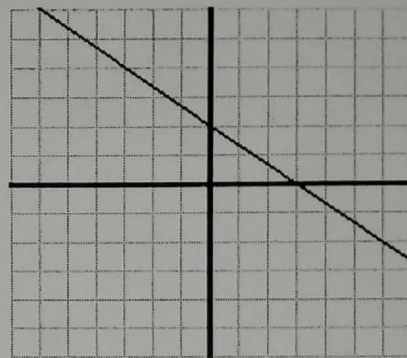
2. Slope is $\frac{1}{4}$ and y-intercept is -5

Write an equation based on the graph.

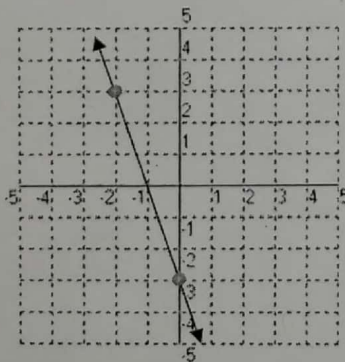
3.



4.



5.



6.

