

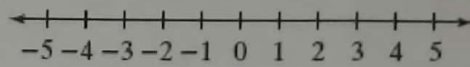

Name _____ Class _____ Date _____

Solving Two-Step Inequalities Worksheet

Solve each inequality. Graph the solutions on a number line.

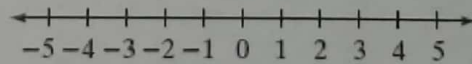

1. $5x + 2 \leq 17$

2. $21 \leq 3 + 9x$



3. $9 - x > 10$

4. $27 \leq 7x + 6$



5. $2x - 5 > 1$

6. $-2x - 3 \leq -5$

