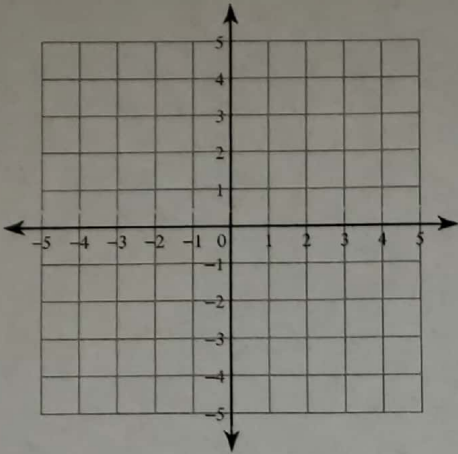
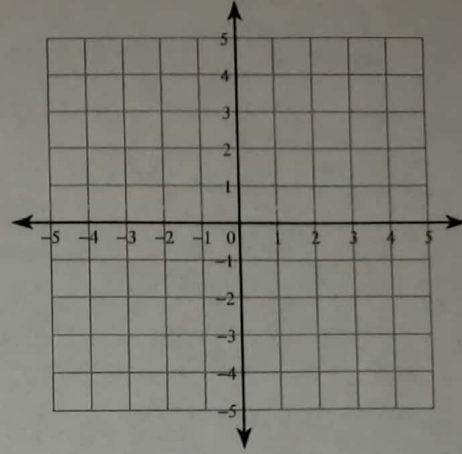


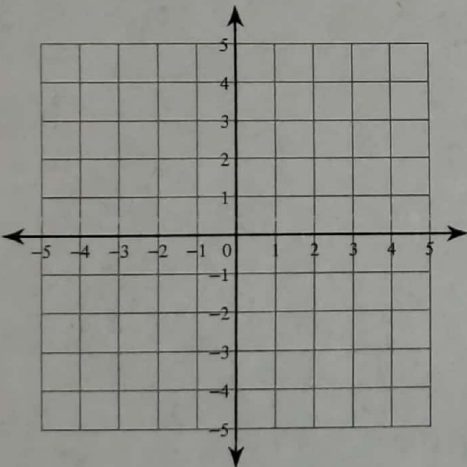
5) $x \leq -3$
 $5x + 3y \geq -9$



6) $4x - 3y < 9$
 $x + 3y > 6$



7) $x + y > 2$
 $2x - y > 1$



8) $x + y \geq 2$
 $4x + y \geq -1$

