
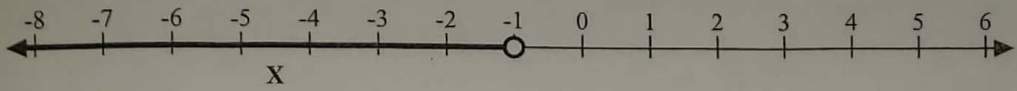
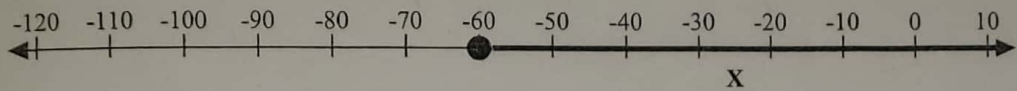
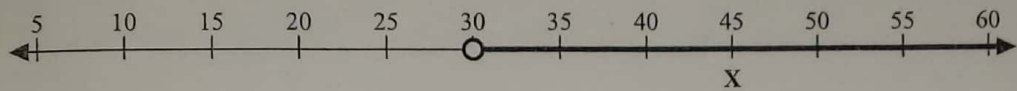
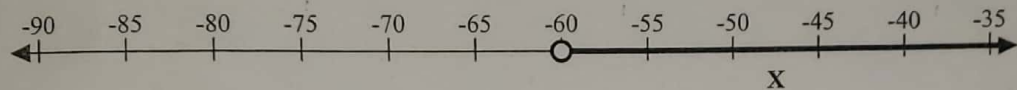
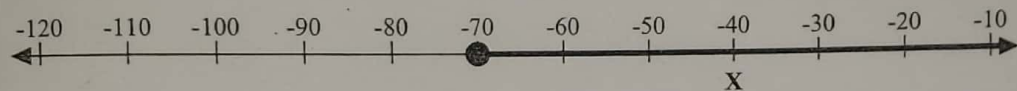
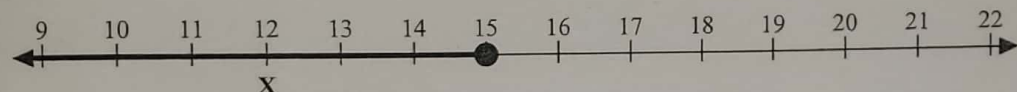

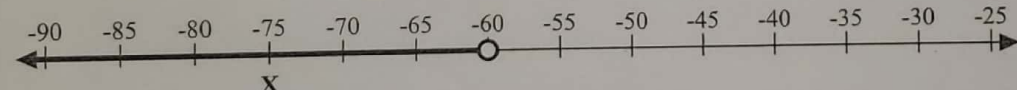
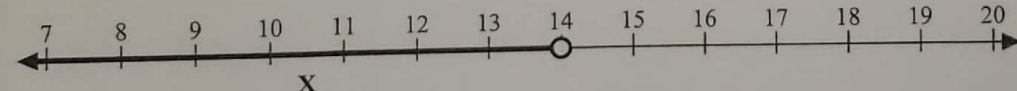

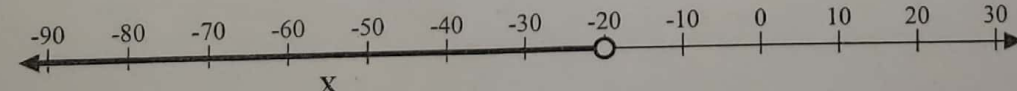
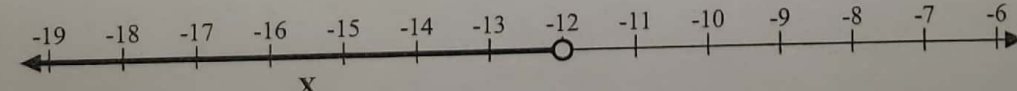
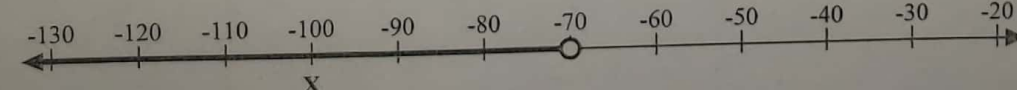


Writing Inequalities from a Numberline

Name: _____

Write an inequality to express the numberline.

- Ex) 
- 1) 
- 2) 
- 3) 
- 4) 
- 5) 
- 6) 
- 7) 
- 8) 
- 9) 
- 10) 
- 11) 
- 12) 
- 13) 

Answers

- Ex. $X \leq 19$
1. _____
2. _____
3. _____
4. _____
5. _____
6. _____
7. _____
8. _____
9. _____
10. _____
11. _____
12. _____
13. _____