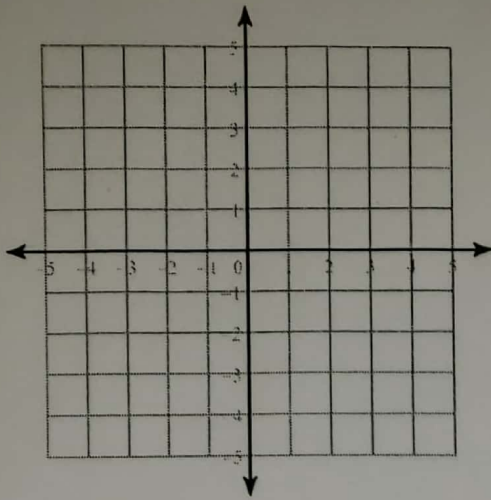
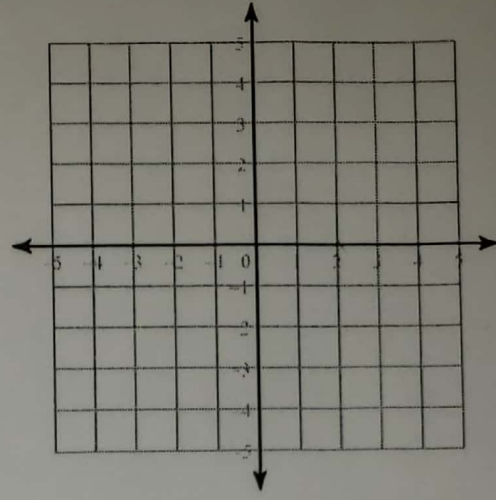


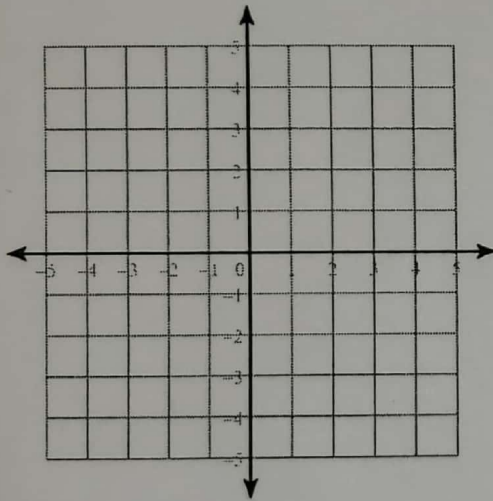
$$27) 2y + x - 4 = 0$$
$$2y = -x + 4$$



$$28) -4 = -2y$$
$$4 + 6x = -y$$



$$29) -2x = -8 - 2y$$
$$-2y - 8 = -2x$$



$$30) 2y + 4 + 3x = 0$$
$$-2y = 8 + 3x$$

