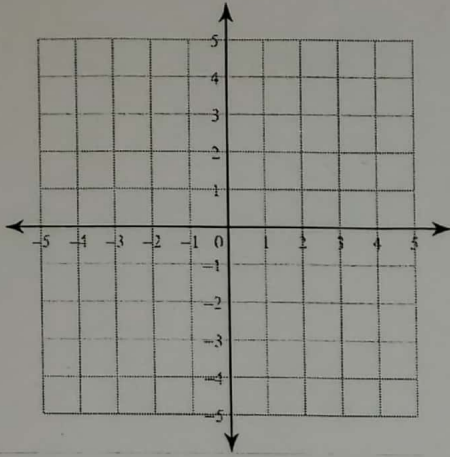


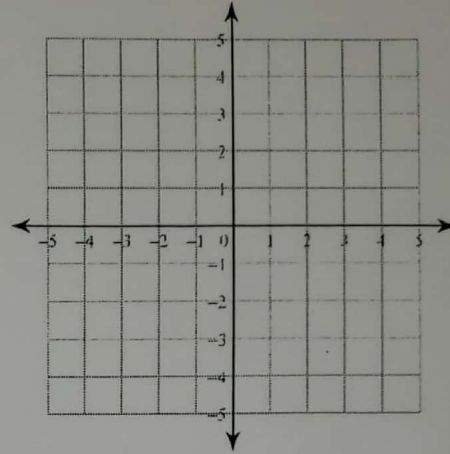
Solving Systems of Equations by Graphing

Solve each system by graphing.

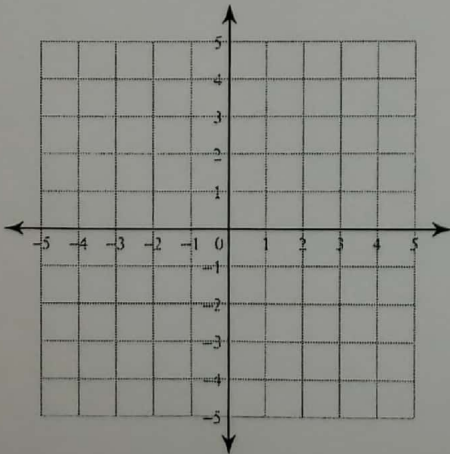
1) $y = \frac{3}{4}x - 1$
 $x = -4$



2) $y = \frac{1}{2}x + 2$
 $y = 3x - 3$



3) $y = \frac{5}{4}x - 2$
 $y = \frac{5}{4}x - 1$



4) $y = \frac{1}{3}x + 2$
 $y = -x - 2$

