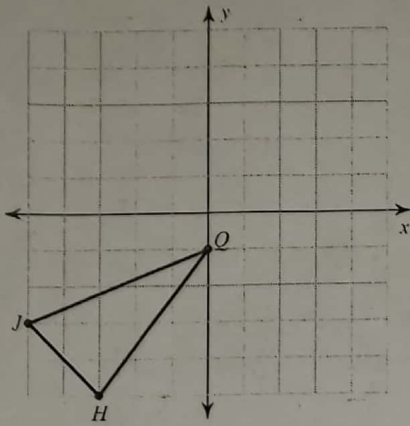


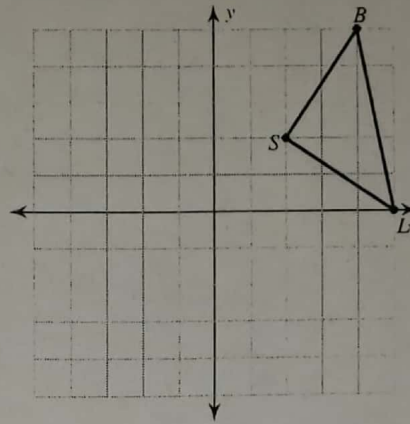
Rotations of Shapes

Graph the image of the figure using the transformation given.

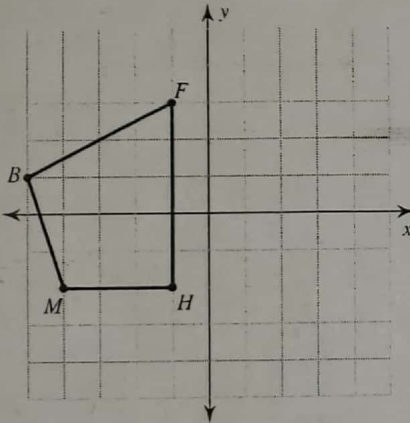
1) rotation 180° about the origin



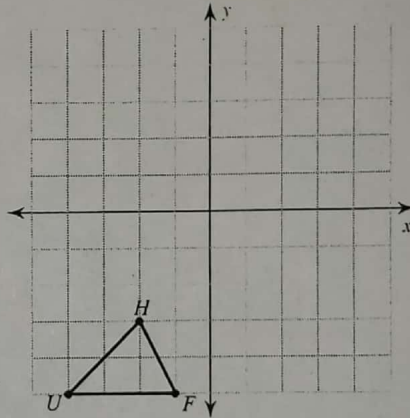
2) rotation 90° counterclockwise about the origin



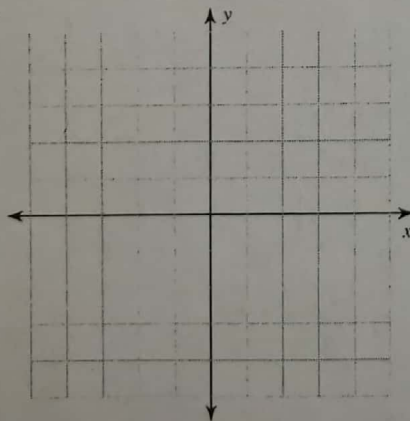
3) rotation 90° clockwise about the origin



4) rotation 180° about the origin



5) rotation 90° clockwise about the origin
 $U(1, -2), W(0, 2), K(3, 2), G(3, -3)$



6) rotation 180° about the origin
 $V(2, 0), S(1, 3), G(5, 0)$

